

## MPE Sample Test

### Question 1

For  $x, y > 0$ ,  $\sqrt{18x^3y^3} =$

- a.   $3x^2y^2\sqrt{2xy}$
- b.   $3xy\sqrt{xy}$
- c.   $3xy\sqrt{2xy}$
- d.   $9xy\sqrt{2xy}$
- e.   $9x^2y^2\sqrt{2xy}$

### Question 2

$(x^3 + 2x^2 - 2x) - (2x^3 + 2x - 1) =$

- a.   $3x^3 + 2x^2 - 1$
- b.   $-x^3 + 2x^2 + 1$
- c.   $-x^3 + 2x^2 - 4x - 1$
- d.   $-x^3 + 2x^2 - 4x + 1$
- e.   $3x^3 + 2x^2 - 4x + 1$

### Question 3

In a certain company, 1100 of the employees are men. What is the total number of employees if 5 out of every 11 employees are men?

- a.  484
- b.  12 100
- c.  2420
- d.  1320
- e.  20

**Question 4**

One of the factors of  $2x^2 + 5x + 3$  is

- a.   $2x - 3$
- b.  Will not factor.
- c.   $x + 1$
- d.   $2x^2$
- e.   $x - 1$

**Question 5**

The positive solution of the equation  $x^2 + 5 = 19$  lies between

- a.  6 and 7.
- b.  4 and 5.
- c.  5 and 6.
- d.  2 and 3.
- e.  3 and 4.

**Question 6**

A customer redeemed 25 coupons, some worth 50 ¢ and some worth 35 ¢, for a total of \$ 10.10. If  $x$  represents the number of 50 ¢ coupons redeemed, which of the following equations would be used to correctly solve for  $x$ ?

- a.   $25(50 - x) + 25(35 - x) = 1010$
- b.   $0.5x + 0.35(25 - x) = 1010$
- c.   $50x + 35(25 - x) = 1010$
- d.   $50x + 35(25 - x) = 10.1$
- e.   $35x + 50(25 - x) = 1010$

**Question 7**

$$(3x^3y)(-x^2y^3)^3 =$$

- a.   $-3x^9y^{10}$
- b.   $-3x^5y^{10}$
- c.   $-3x^8y^7$
- d.   $-3x^9y^9$
- e.   $3x^9y^{10}$

**Question 8**

$$2(3 - (3 - 5)) =$$

- a.  22
- b.  10
- c.  -2
- d.  -10
- e.  8

**Question 9**

Solve  $6x + 10 \geq -2$  for  $x$ .

- a.   $x \leq -2$
- b.   $x \geq -\frac{11}{3}$
- c.   $x \in (-\infty, \infty)$
- d.   $x \geq -2$
- e.   $x \geq 2$

**Question 10**

The length  $L$  of a spring is given by  $L = \frac{5}{4}F + 1$ ,

where  $F$  is the applied force. What force  $F$  will produce a length of 15?

- a.   $\frac{59}{5}$
- b.   $\frac{35}{2}$
- c.   $\frac{56}{5}$
- d.   $\frac{79}{4}$
- e.   $\frac{64}{5}$

**Question 11**

If  $x + 6 = 4x + 5$ , then  $x = ?$

- a.   $\frac{11}{3}$
- b.   $\frac{1}{5}$
- c.   $-\frac{11}{3}$
- d.   $\frac{1}{3}$
- e.   $-\frac{1}{5}$

**Question 12**

Find the  $y$  - coordinate of the point on the graph of  $8x + 4y + 1 = 0$  with an  $x$  - coordinate of 3.

- a.   $-\frac{13}{8}$
- b.  6
- c.  -7
- d.   $-\frac{23}{4}$
- e.   $-\frac{25}{4}$

**Question 13**

$$3x - 3(x - 4) + (y - 4) =$$

- a.   $6x + y - 16$
- b.   $y - 16$
- c.   $16 - y$
- d.   $y + 16$
- e.   $y + 8$

**Question 14**

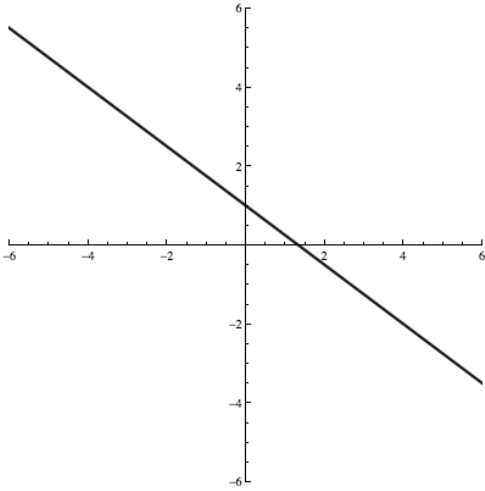
$$\text{If } 6(y - 3) = -3(x + 1), \text{ then } y = ?$$

- a.   $\frac{1}{6}(4 - 3x)$
- b.   $-\frac{x}{2}$
- c.   $\frac{5 - x}{2}$
- d.   $\frac{1}{6}(19 - 3x)$
- e.   $5 - 2y$

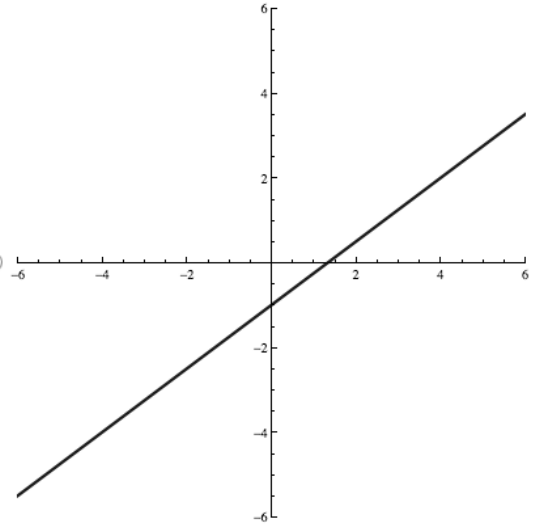
Question 15

Graph  $-4y - 3x = 4$ .

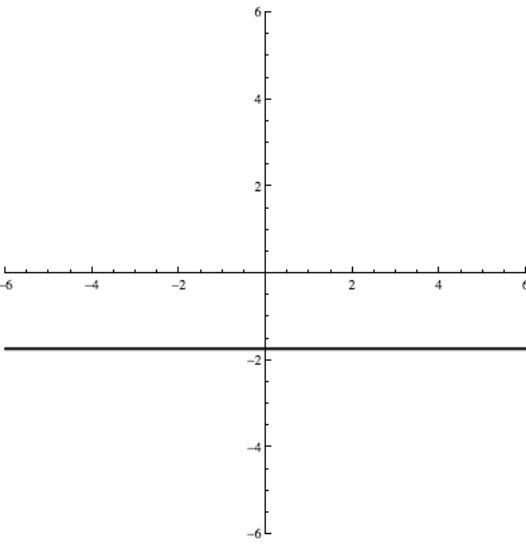
a.



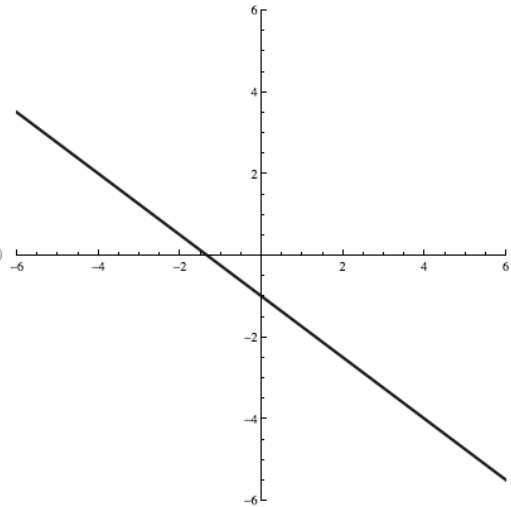
b.



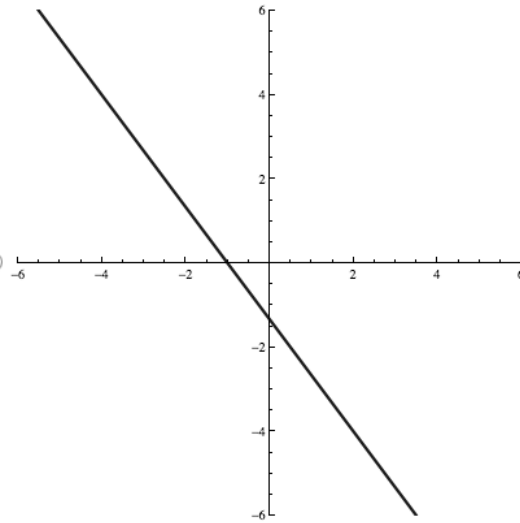
c.



d.



e.



**Question 16**

What is the complete set of values of  $x$

that may not be used in the expression  $\frac{x - 2}{x^2 + 6x}$  ?

- a.   $\{-6, 0\}$
- b.   $\{-6, 6\}$
- c.   $\{0\}$
- d.   $\{2\}$
- e.   $\{-6\}$

**Question 17**

For  $x > 0$ ,  $\sqrt{121x} - \sqrt{25x} =$

- a.   $116\sqrt{x}$
- b.   $\sqrt{6}\sqrt{x}$
- c.   $16\sqrt{x}$
- d.   $-14\sqrt{x}$
- e.   $6\sqrt{x}$

**Question 18**

$\frac{3}{x+2} - \frac{8}{x^2-4} =$

- a.   $\frac{8}{x^2-4} + \frac{3(x-2)}{(x+2)^2}$
- b.   $\frac{3x-14}{x^2-4}$
- c.   $\frac{3x+2}{x^2-4}$
- d.   $\frac{3x-2}{x^2-4}$
- e.   $\frac{3x+14}{x^2-4}$

**Question 19**

$$\frac{x^{-3}y^{-1}}{x^3y^{-1}} =$$

- a.   $\frac{1}{x^6}$
- b.   $\frac{1}{y^2}$
- c.  1
- d.   $\frac{x^9}{y}$
- e.   $\frac{1}{x^6 y^2}$

**Question 20**

$$\frac{x^2 - 49}{x^2 + 14x + 49} =$$

- a.   $-\frac{1}{14x}$
- b.   $\frac{x+7}{x-7}$
- c.  0
- d.   $-\frac{7}{2x+7}$
- e.   $\frac{x-7}{x+7}$

**Question 21**

If  $1 + \frac{7}{x} = \frac{8x+5}{x}$ , then  $x = ?$

- a.   $\left\{\frac{2}{7}\right\}$
- b.  No solution.
- c.   $\left\{0, \frac{2}{7}\right\}$
- d.   $\left\{\frac{3}{8}\right\}$
- e.   $\left\{-\frac{1}{4}, \frac{1}{2}\right\}$



**Question 22**

$$4(3x + 2y)^2 =$$

- a.   $12x^2 + 48xy + 8y^2$
- b.   $36x^2 + 16y^2$
- c.   $36x^2 + 48xy - 16y^2$
- d.   $36x^2 - 48xy + 16y^2$
- e.   $36x^2 + 48xy + 16y^2$

**Question 23**

If  $f(x) = -3x^2 - 4x + 1$ , then  $f(2) = ?$

- a.  -3
- b.  -19
- c.  -21
- d.  5
- e.   $2(-3x^2 - 4x + 1)$

**Question 24**

In the solution for the system of equations  $\{x - 3y = 1, x - 2y = 4\}$ , the  $x$ -value is ?

- a.  2
- b.  -2
- c.  10
- d.   $\frac{14}{5}$
- e.  -14

**Question 25**

If  $x = -2$  and  $y = 3$ , then  $x^2 y^3 - \frac{2x}{3y} = ?$

a.   $-\frac{69\,980}{9}$

b.  112

c.   $\frac{968}{9}$

d.   $\frac{15\,556}{9}$

e.   $\frac{976}{9}$